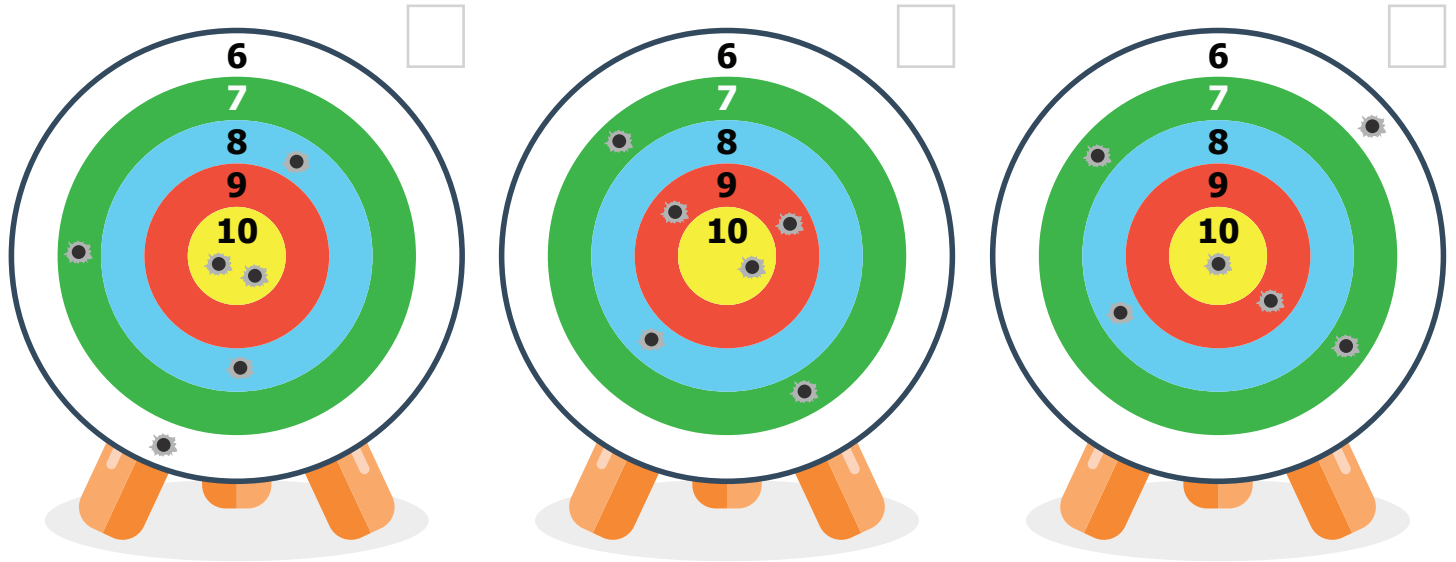


Tireurs d'élite

Chiffres & calculs

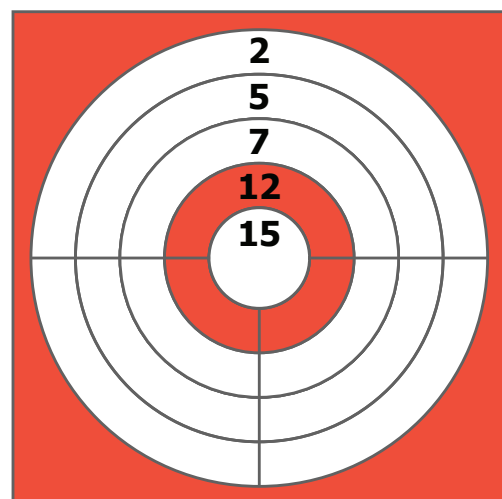
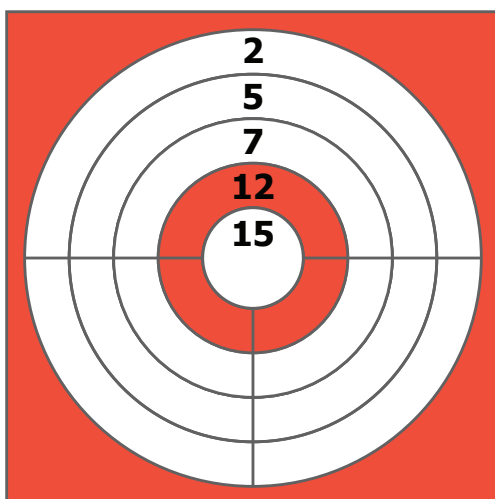
Calculez le score des tireurs et classez les cibles de la 1^{er} à la 3^{ème} position.



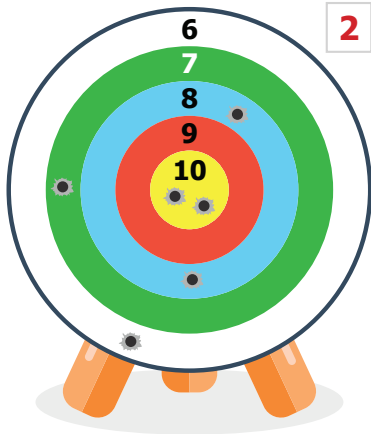
Deux amis tirent chacun 4 fois, retrouvez et notez sur les cibles les impacts de leurs plombs.

Score de Marcel : **41**

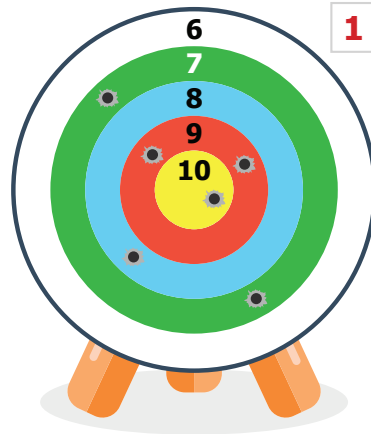
Score de Jeanne : **42**



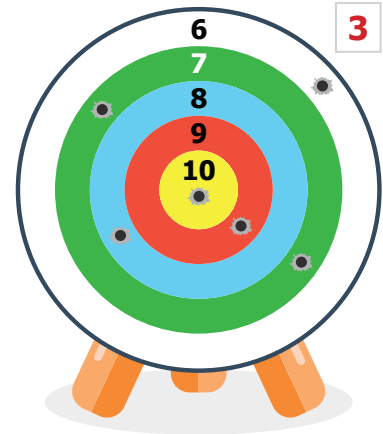
SOLUTIONS - fiche 21



$$\begin{aligned}
 &= 10 + 10 + 8 + 8 + 7 + 6 \\
 &= 20 + 16 + 13 \\
 &= 49
 \end{aligned}$$

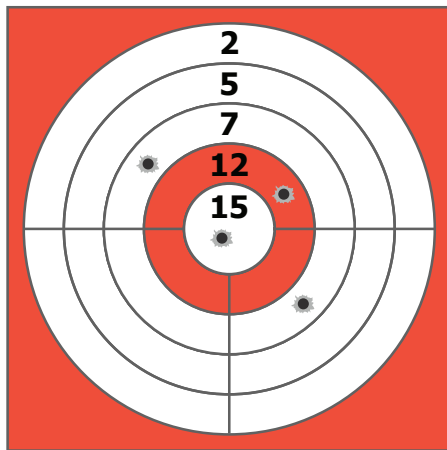


$$\begin{aligned}
 &= 10 + 9 + 9 + 8 + 7 + 7 \\
 &= 10 + 18 + 8 + 14 \\
 &= 50
 \end{aligned}$$



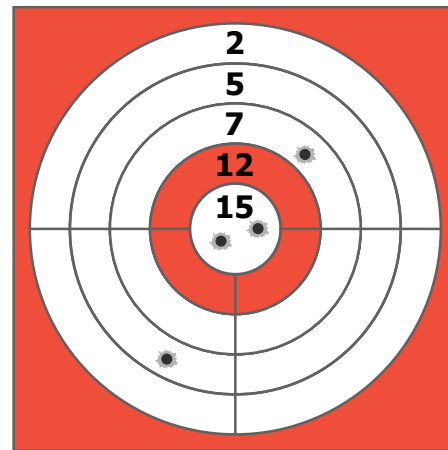
$$\begin{aligned}
 &= 10 + 9 + 8 + 7 + 7 + 6 \\
 &= 10 + 17 + 14 + 6 \\
 &= 47
 \end{aligned}$$

Score de Marcel : 41



$$\begin{aligned}
 &= 15 + 12 + 7 + 7 \\
 &= 27 + 14 \\
 &= 41
 \end{aligned}$$

Score de Jeanne : 42



$$\begin{aligned}
 &= 15 + 15 + 7 + 5 \\
 &= 30 + 12 \\
 &= 42
 \end{aligned}$$

